

SANSKAR SCHOOL
GRADE-4
Assignment 14
Date: Monday, 19th July 2021

ENGLISH:

Reading and explanation of the poem **SEEDS** (page 33 and 34). Write new words and glossary in your literature notebook.

MATHS:

Line Graph

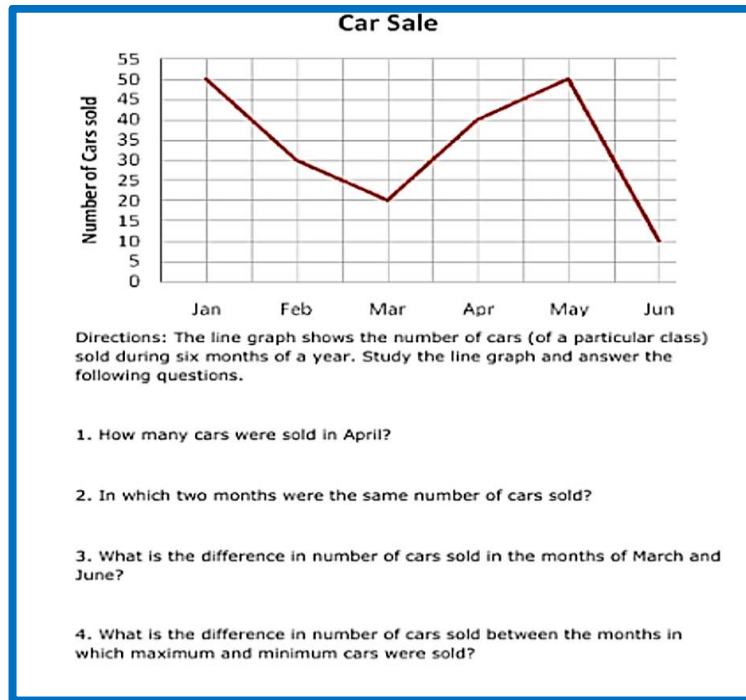
Q1. Draw a line graph in your notebook using the following data.



Question : An electronics shop records the number of TVs sold over the course of a week. The number of TVs sold each day is shown in the table below. Draw a line graph to show this data.

Day	Monday	Tuesday	Wednesday	Thursday	Friday
TVs Sold	1	4	3	4	6

Q2. Read the given line graph and write answers in your notebook.



HINDI:

जैव विविधता से संबंधित वीडियो देखिए तथा कक्षा में परिचर्चा के लिए तैयार रहिए ।

Video Link: <https://youtu.be/FXccIRdb5wc>

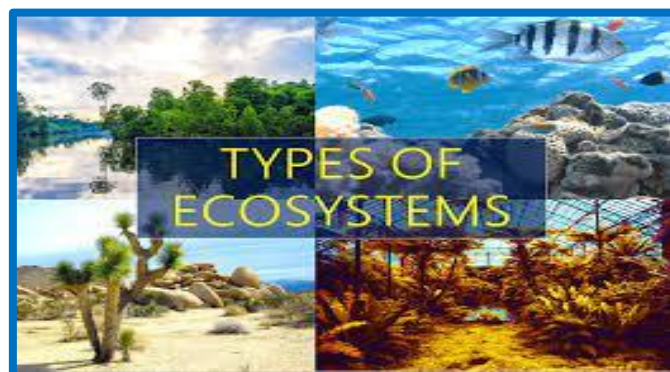
<https://youtu.be/ehkgMFnyAbE>

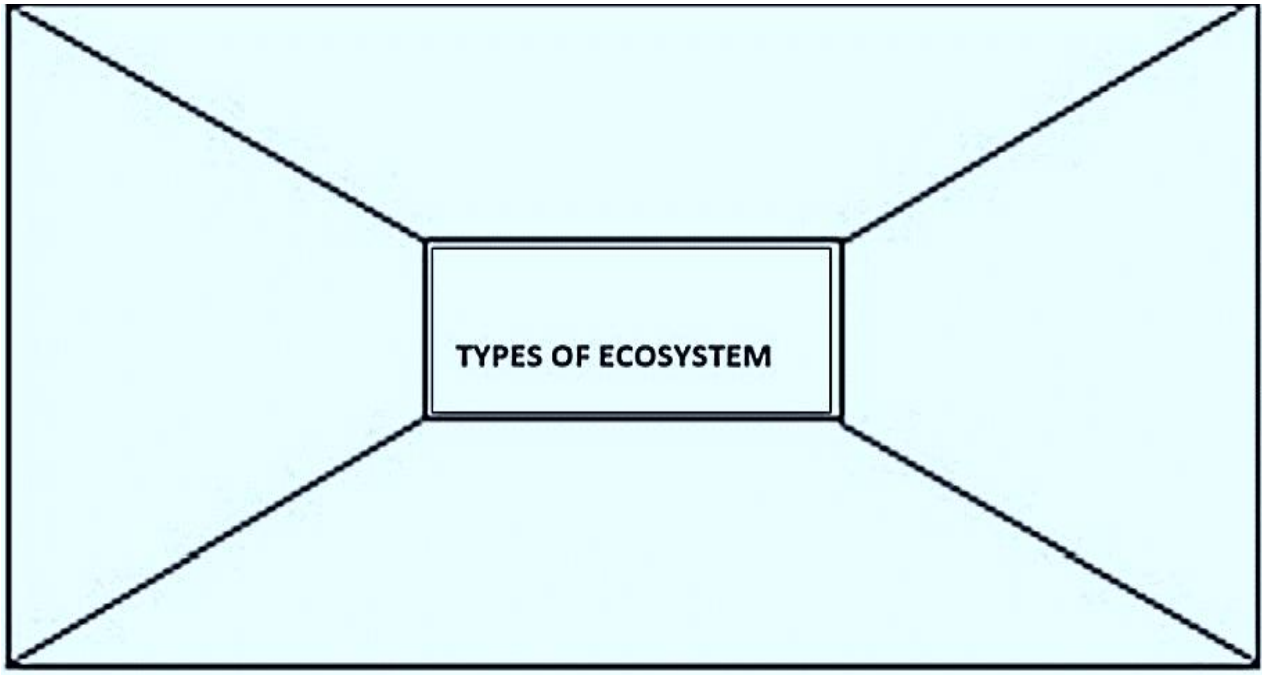
UOI:

An ecosystem is a system involving the interactions between a community of living organisms in a particular area and its non-living environment.

Explore the **Different Types of Ecosystems** through the following video, and reflect your understanding using the **Table Mat** graphic organizer

Video Link: https://youtu.be/Ej_Okq1SSbQ





G.K.:

A **Castle** is a type of fortified structure built in Europe and the Middle East during the Middle Ages by nobility. Let's learn more about these beautiful and famous castles of Europe. (Pages 16 and 17)



MUSIC:

फूलो ने जाके बूंदों से पुछा

PART 2

- 1 – अंधेरो से हम घिरे हुए, अंधेरो से हम भागे हुए
पल पल पल हम जिए, कितने काले धुएं में
हवाओ ने जाके पत्तो से पूछा
पत्तो ने जाके पेड़ो से पूछा
हम वहा रहेंगे, हम कैसे खिलेंगे, हम कैसे जियेंगे

तराना (CHORUS)

दिम त दिम त देरे न, देरे न अ देरे न

Video Link: https://youtu.be/_pGOAfhDQtA

P.E.:

Watch the video and **Learn Basic Breathing Exercises.**

Video Link: https://youtu.be/_y4cn55v3n4